


Chapter 7 Review

Name: _____

1 Multiply. Use the decimal model.


$$0.7 \times 0.3 = \underline{0.21}$$



7.1

2 Multiply. Use the decimal model.

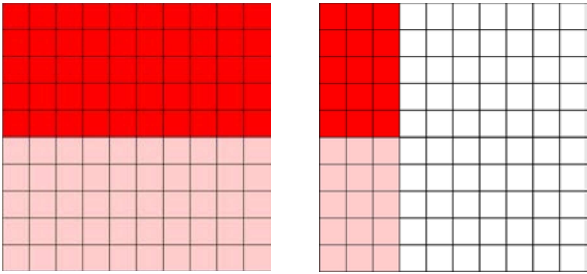
$$0.5 \times 0.9 = \underline{0.45}$$



7.1

3 Multiply. Use the decimal model.

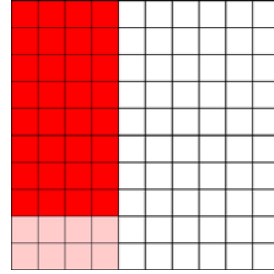
$$0.5 \times 1.3 = \underline{0.65}$$



7.1

4 Multiply. Use the decimal model.

$$0.8 \times 0.4 = \underline{0.32}$$



7.1

5 Find the product.

$$\begin{array}{r} 7.1 \\ \times 0.96 \\ \hline 6.816 \end{array}$$

7.2

6 Find the product.

$$\begin{array}{r} 10.03 \\ \times 3.3 \\ \hline 33.099 \end{array}$$

7.2

7 Find the product.

$$\begin{array}{r} 16.8 \\ \times 2.92 \\ \hline 49.056 \end{array}$$

7.2

8 Find the product.

$$\begin{array}{r} 5.7 \\ \times 8.4 \\ \hline 47.88 \end{array}$$

7.2

Chapter 7 Review

9 Find the product.

$$\begin{array}{r} 0.4 \\ \times 0.8 \\ \hline 0.32 \end{array}$$

7.3

10 Find the product.

$$\begin{array}{r} 0.7 \\ \times 0.07 \\ \hline 0.049 \end{array}$$

7.3

11 Find the product.

$$\begin{array}{r} 0.09 \\ \times 0.2 \\ \hline 0.018 \end{array}$$

7.3

12 Find the product.

$$\begin{array}{r} 0.3 \\ \times 0.9 \\ \hline 0.27 \end{array}$$

7.3

13 Use properties to find the product.

$$4 \times 9.32 = \underline{37.28}$$

7.4

14 Use properties to find the product.

$$7.141 \times 3.2 \times 0 \times 8.19 \\ = \underline{0}$$

7.4

15 Use properties to find the product.

$$48.972 \times 1 = \underline{48.972}$$

7.4

16 Use properties to find the product.

$$0.6 \times 1.4 \times 0.2 = \underline{0.168}$$

7.4